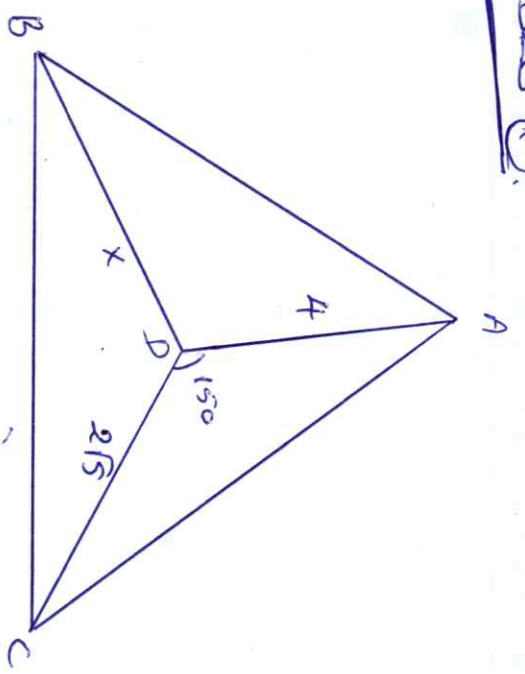
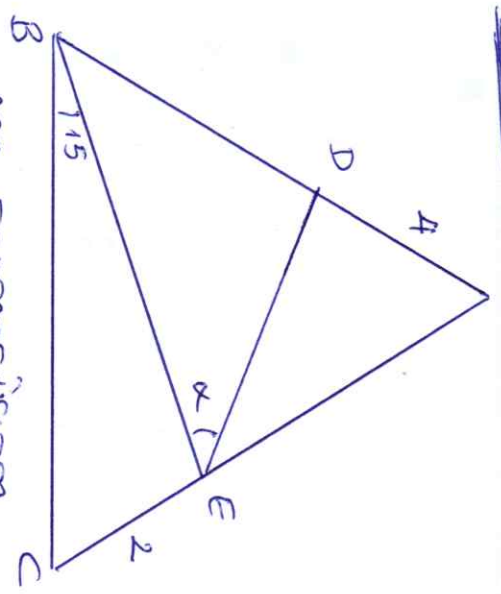


Soru 1:



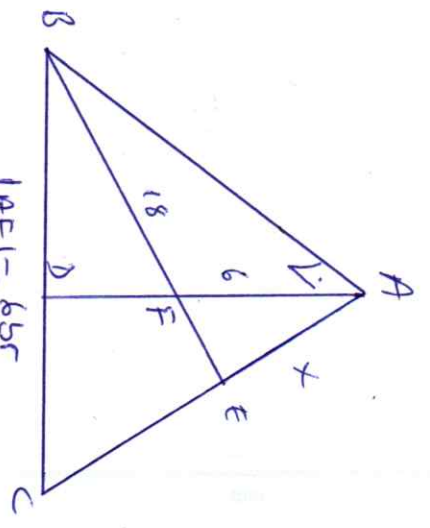
ABC Eşkenar üçgen
 $|AD| = 4br$
 $|CD| = 2\sqrt{5}br$
 $|BD| = x = ?$

Soru 2:



ABC Eşkenar üçgen.
 $|AD| = 4br$
 $|EC| = 2br$
 $m(\widehat{B}) = 15^\circ$
 $m(\widehat{DEB}) = \alpha = ?$

Soru 3:



$|AF| = 6br$
 $|BE| = 18br$
 $[BE] : Aqırtıy.$
 $|AD| = |CD|.$
 $|AE| = x = ?$