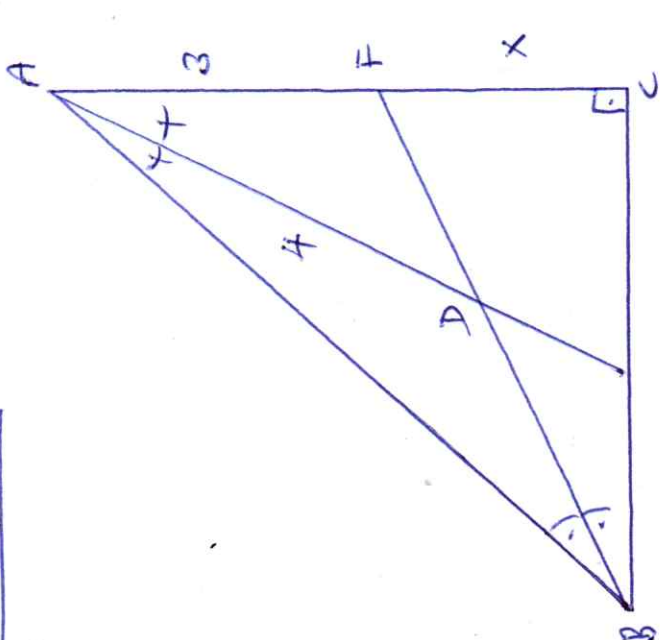
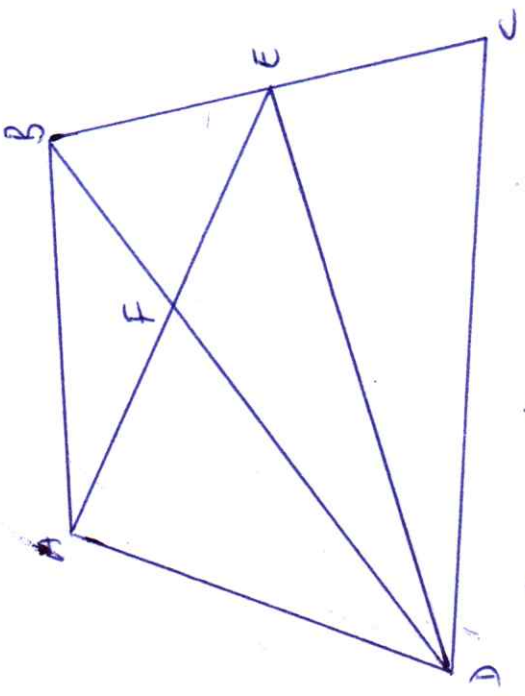


SORU: 1



D: ~~14~~ ~~set~~ ~~centerim~~ ~~merkezi~~
 $|AD| = 4$, $|AF| = 3$, $|CF| = x$?

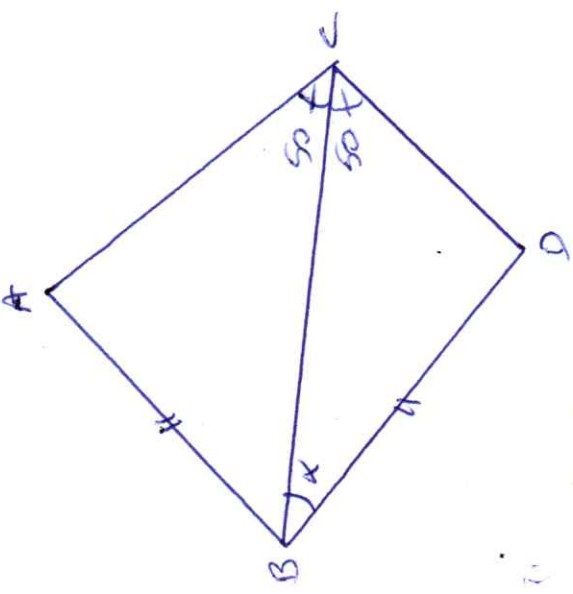
SORU: 2



$\hat{A}ED$ ile \hat{DBC} eşit mi? ~~üçgen~~.

$$\frac{|AB|}{|EC|} = ?$$

SORU: 3



$|AB| = |CD|$
 $m(\hat{BAC}) = 70^\circ$
 $|AC| > |CD|$
 $m(\hat{CED}) = x = ?$